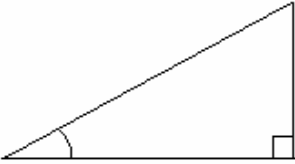
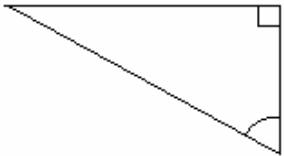
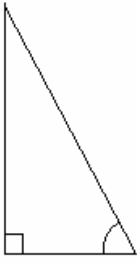
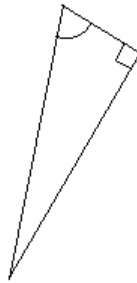
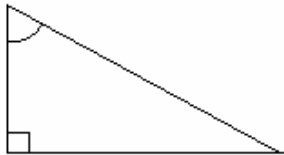
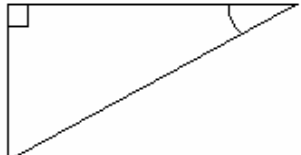
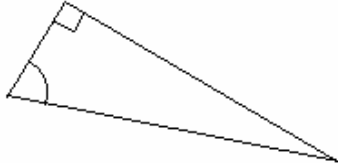

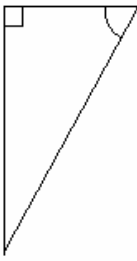
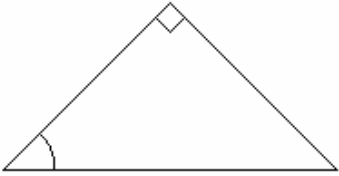
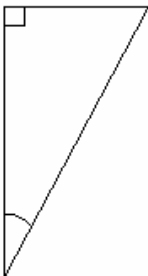
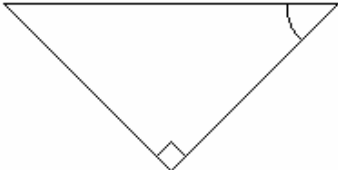


Trigonometry Worksheet T1 – Labelling Triangles

Label the sides of the triangles below with O for Opposite, A for Adjacent and H for Hypotenuse,

1. 	7. 
2. 	8. 
3. 	9. 
4. 	10. 
5. 	11. 
6. 	12. 

Trigonometry Worksheet T2 – Sine, Cosine & Tangent Values

Give the value of each of the following:

1. $\sin 25^\circ$

2. $\cos 53^\circ$

3. $\tan 34^\circ$

4. $\sin 22^\circ$

5. $\cos 75^\circ$

6. $\tan 83^\circ$

7. $\sin 57^\circ$

8. $\cos 89^\circ$

9. $\tan 44^\circ$

10. $\sin 27^\circ$

11. $\cos 12^\circ$

12. $\tan 89^\circ$

13. $\sin 32^\circ$

14. $\cos 36^\circ$

15. $\tan 42^\circ$

16. $\sin 55^\circ$

17. $\cos 38^\circ$

18. $\tan 51^\circ$